

Missing Numbers

11	12			15
		9	10	
9	10			13

16	17	18		
14	15			
15	16	17		

Backward Counting

Write numbers from 20 to 1.

20				16				12	
10								3	

Before, After and Between

Before

14	
18	
20	
17	
12	

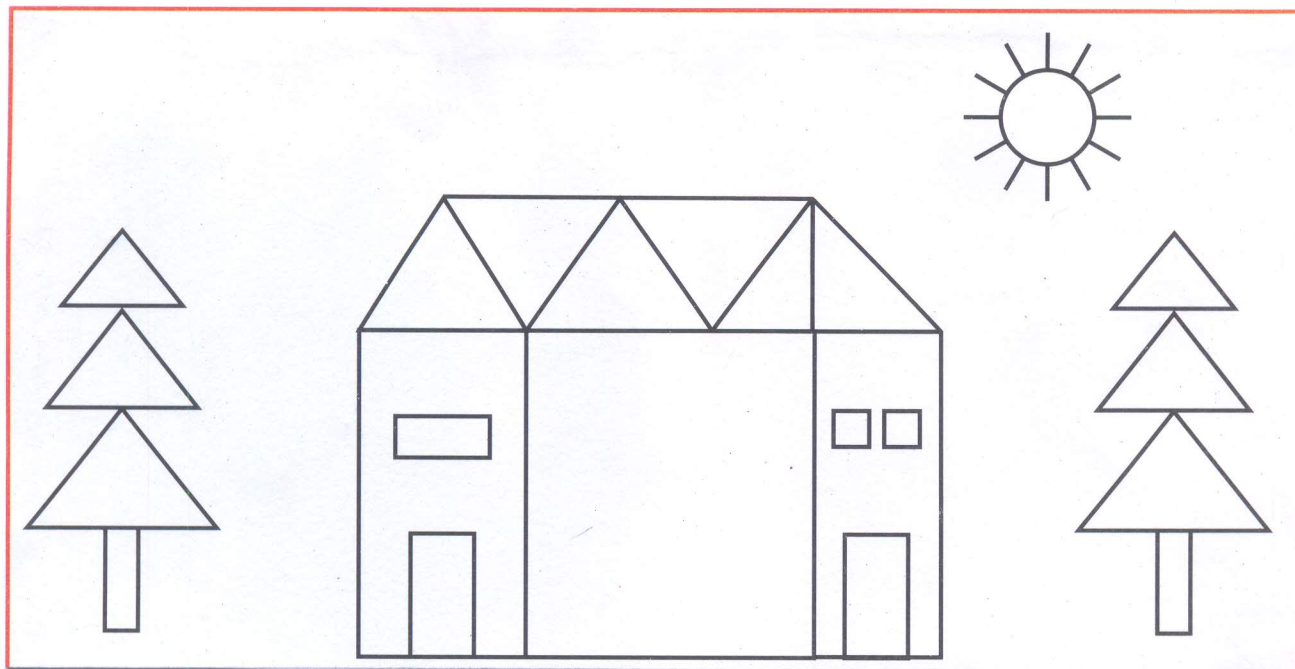
After

11	
17	
13	
19	
14	


Between

12		14
18		20
15		17
10		12
14		16

Identify, count and colour the shapes in the picture.

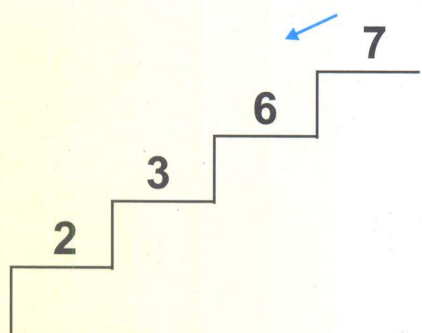


5

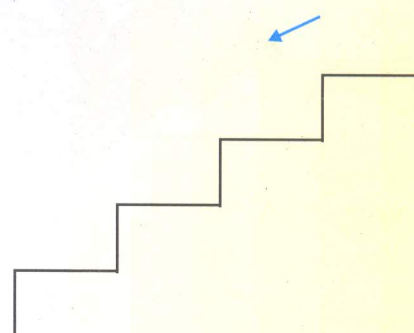


Write the numbers from biggest to smallest.

3 6 2 7

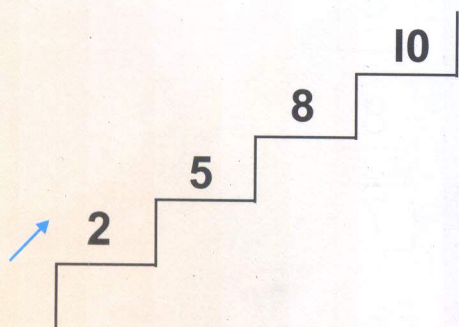


2 6 7 5



Write the numbers from smallest to biggest.

2 10 8 5



2 4 3 0

