

MATHS

- ① Do 10-10 sums of 'Addition' (carry) and 'Subtraction' (borrow)

- ② Match the columns: -

Column A

893

486

208

969

738

543

290

Column B

$400 + 80 + 6$

$200 + 90 + 0$

$800 + 90 + 3$

$700 + 30 + 8$


$900 + 60 + 9$



$500 + 40 + 3$

$200 + 0 + 8$





- ③ Identify the odd and even numbers.

- Colour all the odd numbers with blue colour.
- Colour all the even numbers with green colour.





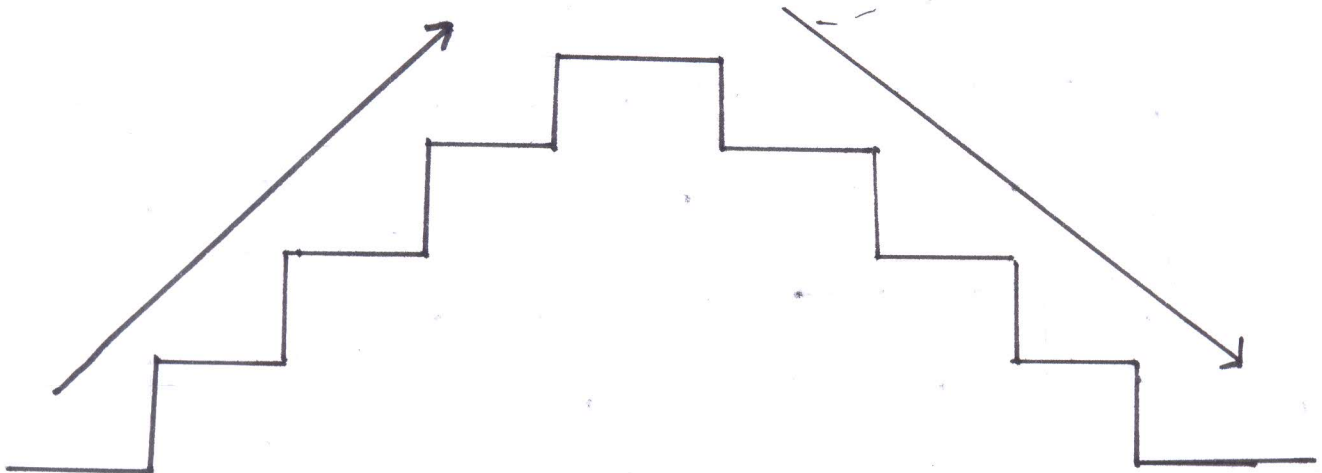
④ Fill in the blanks in the big balloons. Match the answers with the small balloons.



⑤ Arrange the numbers in ascending and descending orders: -

Ascending order - 134, 432, 560, 764, 321

Descending order - 324, 436, 709, 655, 455



NOTE → class tests will be conducted after summer break.