

Que 1. What does the blue colour show on the map?

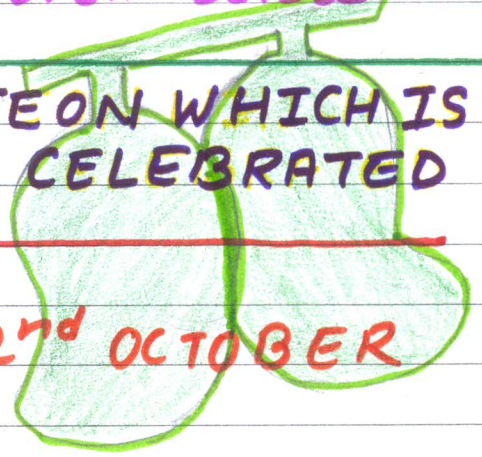
Que 2. What do you mean by the words

'Satyameva Jayate'?



Que 3 Complete the table given below -

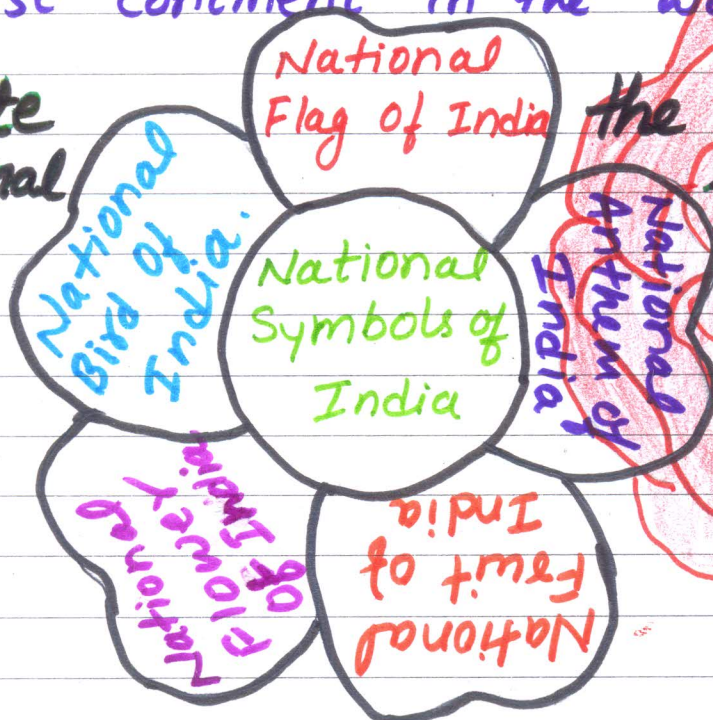
NAME OF FESTIVAL	DATE ON WHICH IS CELEBRATED
1. INDEPENDENCE DAY	a) _____
2. _____	b) 2 <sup>nd</sup> OCTOBER
3. REPUBLIC DAY	c) _____



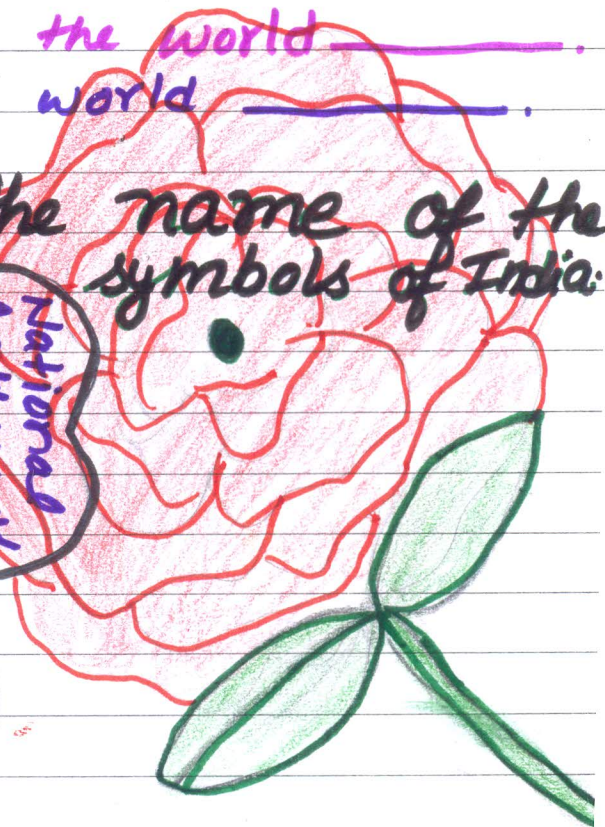
Que 4. Give one word for the following -

- a. Capital of India \_\_\_\_\_
- b. Model of the earth \_\_\_\_\_
- c. Symbol for Indian rupee \_\_\_\_\_
- d. Second longest beach in the world \_\_\_\_\_
- e. Longest continent in the world \_\_\_\_\_

Que 5. Write national



the name of the symbols of India:



## PROJECT WORK:

\* Make a working model of traffic lights through battery showing the traffic rules. [R.No. 1 to 20]

\* On an outline map of India show the states with their capital and paste it on A-4 size sheet. [R.No 21 onwards]

### NOTE:-

\* Do Holiday Homework neatly in S.st notebook.

\* Revise all the syllabus done in the class.

LAST DATE FOR SUBMISSION OF HOLIDAYS' HOMEWORK IS 04/07/18.