

Maths

Topic _____

Date _____

Q.1 Write number names in Indian number system.

a) 2,34,075

b) 14,82,006

Q.2 Write standard form for

a) 6 lakhs + 8 thousands + 4 hundreds + 5 ones

Q.3 Round off the given numbers to nearest 10, 100, 1000

a) 18,953

Q.4 Subtract and check your answer.

a) $426256 - 318518$

Q.5 Fill in the blanks :-




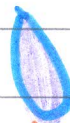


a) $4176 \times 200 = \underline{\hspace{2cm}}$

b) $8431 \times 1000 = \underline{\hspace{2cm}}$

c) $6134 \times \underline{\hspace{1cm}} = 6134$

d) $8410 \times \underline{\hspace{1cm}} = 0$

Q.6 Divide and check your answer
990 by 8



Q.7 Cost of one bag is ₹ 846.
Find the cost of 24 such bags.

* Learn table from 2 to 15.



DO HOLIDAY HOMEWORK NEATLY IN
MATHS NOTEBOOK

LAST DATE FOR SUBMISSION OF HOLIDAY
HOMEWORK IS 4th JULY 2018

