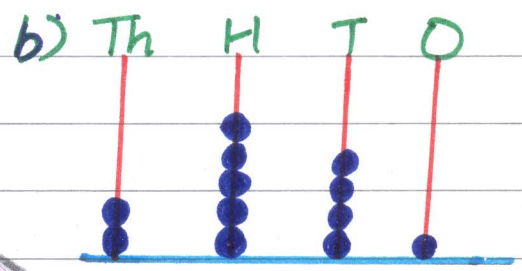
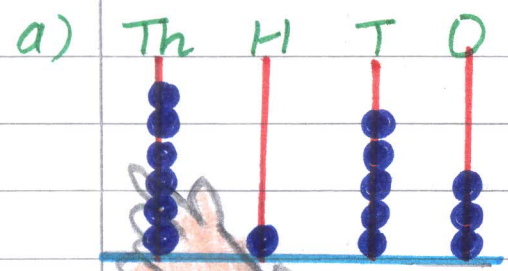


MATHS

Topic _____ Date _____

Que 1. Learn tables from 2 to 10.

Que 2. Write the number names of the number represented on the abacus.



a) _____
b) _____


Que 3. Add the following numbers:

- a) $6793 + 408 + 7998$
- b) $866 + 1108 + 4235$

Que 4. Write the following in short form.

- a) $7000 + 400 + 3$
- b) $8000 + 30 + 5$

Que 5. Do as given:



Title _____ Date _____

Page No. _____

- a) colour the smallest 4-digit number. [GREEN]
- b) colour the largest 4-digit number. [ORANGE]
- c) colour the predecessor of 5370. [RED]
- d) colour the successor of 7999. [YELLOW]
- e) colour the number greater than 4000. [PINK]
- f) colour the odd numbers. (BROWN)
- g) colour the even numbers. (BLUE)

LAST DATE FOR SUBMISSION OF HOLIDAYS'
HOMEWORK IS 04/07/18.