

Topic \_\_\_\_\_

# MATHS

I am between 7 and 9.

I am before 8.

I am after 8.



Q1. Fill in the blanks: -

a) \_\_\_\_\_ - 0 = 74

b) 569 - \_\_\_\_\_ = 568

c) 800 - \_\_\_\_\_ = 800

d) 463 - 1 = \_\_\_\_\_

e) 195 + 1 = \_\_\_\_\_

f) 690 - 0 = \_\_\_\_\_

Q2) Subtract.




1. H T O  
 7 9 2  
 - 3 5 4  
 \_\_\_\_\_

2. H T O  
 5 3 0  
 - 5 3 0  
 \_\_\_\_\_

3. H T O  
 9 4 3  
 - 6 2 8  
 \_\_\_\_\_

Q3) Solve

We form a 3-digit number




H T O  
 1 4 3  
 X 2  
 \_\_\_\_\_

H T O  
 2 1 2  
 X 4  
 \_\_\_\_\_

H T O  
 1 2 3  
 X 3  
 \_\_\_\_\_

H T O  
 1 1 1  
 X 8  
 \_\_\_\_\_








Q4) A fruit seller has 52 watermelons. He sells 27 in a day. How many watermelons are still left?

Number of watermelons seller has = \_\_\_\_\_  
 Number of watermelons he sold = \_\_\_\_\_  
 Number of watermelons left = \_\_\_\_\_

Q5) What time is it?

What Time Is It?

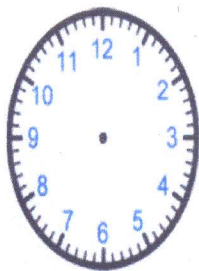


Q6) Draw the hands on the clock face :-


Draw the Hands on the Clock Face



11:00



4:30



1:30

Q7) Learn tables 2 to 10

Q8) Learn Months and days name.

