




Topic \_\_\_\_\_

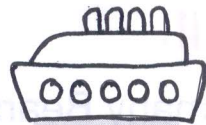

# MATHS

Date \_\_\_\_\_

★ Look around and count how many.



★ Now, colour the pictures and fill in the correct numbers.



Blank box with a vertical dashed line for writing the number of suns.

Blank box for writing the number of stars.


Blank box for writing the number of seashells.

Blank box for writing the number of seagulls.

Blank box with a vertical dashed line for writing the number of sailboats.

Blank box with five small circles for writing the number of cruise ships.


Blank box with a vertical dashed line for writing the number of sandcastles.



Topic \_\_\_\_\_


Date \_\_\_\_\_

Write the missing numbers.



13	14	
17	18	
18	19	

11	12	
14	15	
16	17	



	15	16
	19	20
	12	13

	17	18
	16	17
	18	19



11		13
16		18
13		15

14		16
12		14
15		17

