

x MATHS x

Q-1 Draw the following shapes according to the given instructions:-

- a) A shape which has 3 sides and 3 corners.
- b) A shape which has 4 sides and 4 corners and all sides are equal.
- c) A shape which has 0 sides and 0 corners.

Q-2 Write even or odd.

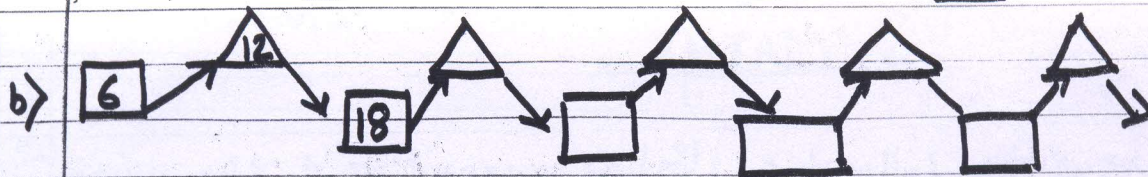
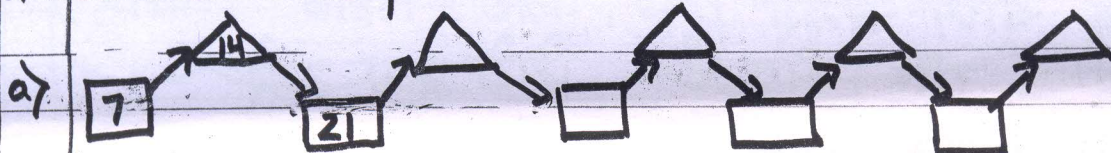
	Number	Even / Odd
a) Your school admission number	<input type="text"/>	<input type="text"/>
b) Your date of birth	<input type="text"/>	<input type="text"/>
c) Your house number	<input type="text"/>	<input type="text"/>
d) Your friend's birth date	<input type="text"/>	<input type="text"/>

Q-3 Answer the following questions -

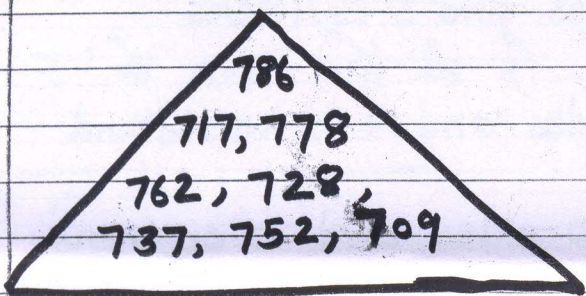
- a) How many fingers do 6 boys have altogether in their hands?
- b) How many legs do 14 birds have altogether?

c) How many sixes are there in 42?

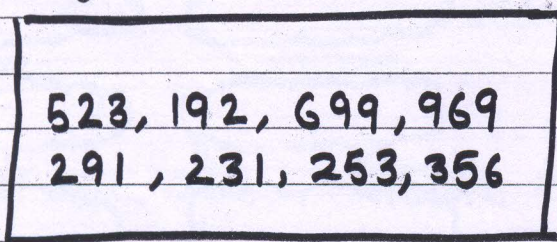
Q-4 Continue the pattern.



Q-4 Arrange the numbers in ascending order:-



Q5 Arrange the numbers in descending order:-



Q6 Do practise for Addition and Subtraction and learn tables 1 to 5.