

MATHS

What number comes -

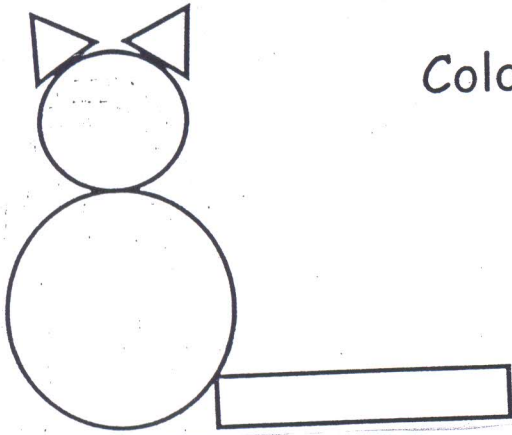
BEFORE

AFTER




BETWEEN

1	2	2	3	2	3	4
	5	4		7		9
	8	9		11		13
	10	7		8		10
	13	3		14		16
	16	14		19		21
	25	20		23		25
	29	26		26		28
	32	19		21		23
	36	35		36		38
	31	42		45		47
	47	37		22		24
	38	47		44		46
	49	34		38		40

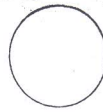
Colour each picture according to the colour code given below.



Colour code :

-  - Red
-  - Blue
-  - Green


How many circles ? _____







How many triangles ? _____



How many rectangles ? _____



Colour code :

-  - Yellow
-  - Pink
-  - Red
-  - Orange

How many circles ? _____



How many triangles ? _____



How many squares ? _____



How many rectangles ? _____



MATHS

Look at the given scene, Count the numbers of each given object and write the number against the object

